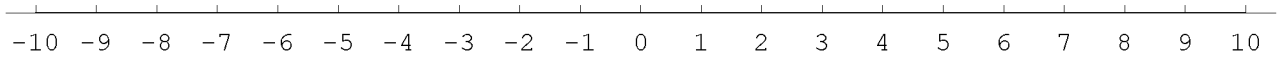


Name _____

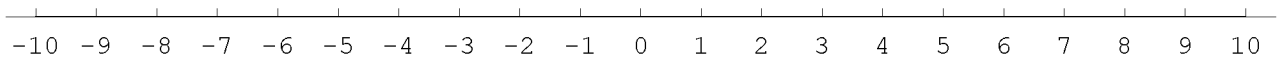
[07-09-06-T10]
Interval notation

■ **A. Graph each solution set. and then write in interval notation. Answer on this sheet.**

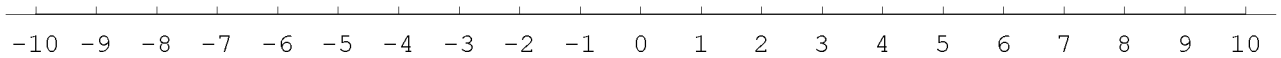
[1] $|x| > 2$



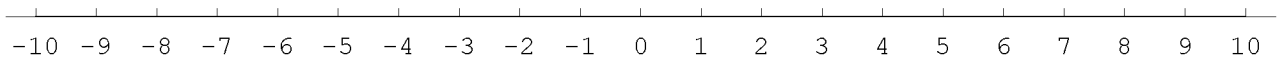
[2] $|x| < 5$



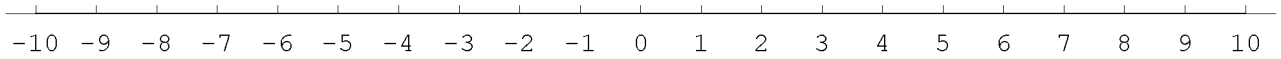
[3] $|x| \leq 2$



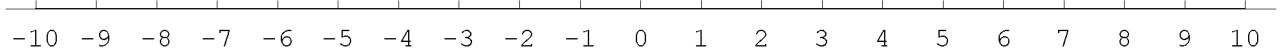
[4] $|x - 3| < 5$



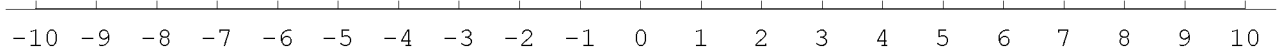
[5] $|x - 4| < 6$



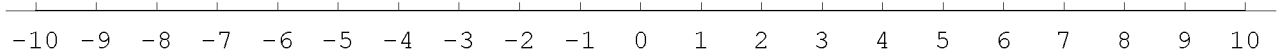
[6] $|x - 3| > 7$



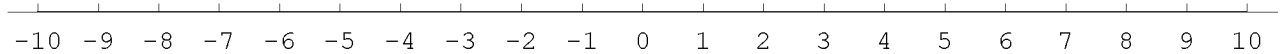
[8] $|x + 2| > 6$



[9] $|x + 8| < 3$



[10] $2x - 3 < 12$



Formulae